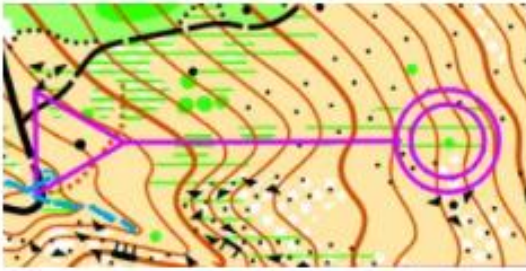


RASPUNSURI CORECTE LA INTERPRETAREA CURBELOR DE NIVEL – THE BEST OF 2020.



HARTA NR. 1

CUM SE MERGE PE TEREN INTRE START SI SOSIRE, PE HARTA NR.1 ? *

- IN SUS IN JOS IN SUS APOI IN JOS IN JOS APOI IN SUS

INTERPRETAREA CURBELOR DE NIVEL



HARTA NR. 2

CUM SE MERGE PE TEREN INTRE START SI POSTUL DE CONTROL, PE HARTA NR.2 ? *

- IN SUS IN JOS IN SUS APOI IN JOS IN JOS APOI IN SUS


INTERPRETAREA CURBELOR DE NIVEL



HARTA NR. 3

CUM SE MERGE PE TEREN INTRE START SI SOSIRE, PE HARTA NR.3 ? *

- IN SUS IN JOS IN SUS APOI IN JOS IN JOS APOI IN SUS

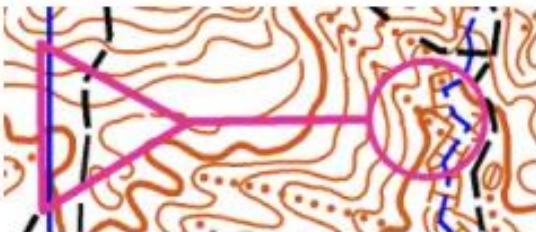


HARTA NR. 4

CUM SE MERGE PE TEREN INTRE START SI SOSIRE, PE HARTA NR.4 ? *

- IN SUS
 IN JOS
 IN SUS APOI IN JOS
 IN JOS APOI IN SUS

INTERPRETAREA CURBELOR DE NIVEL

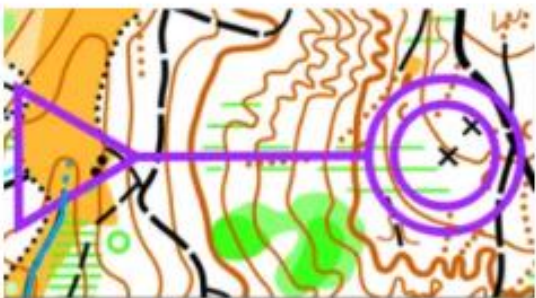


HARTA NR. 5

CUM SE MERGE PE TEREN INTRE START SI POSTUL DE CONTROL, PE HARTA NR.5 ? *

- IN SUS
 IN JOS
 IN SUS APOI IN JOS
 IN JOS APOI IN SUS

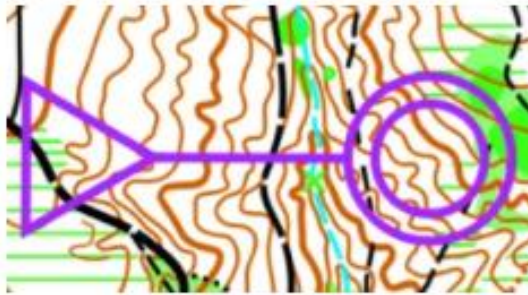
INTERPRETAREA CURBELOR DE NIVEL



HARTA NR. 6

CUM SE MERGE PE TEREN INTRE START SI SOSIRE, PE HARTA NR. 6 ? *

- IN SUS
 IN JOS
 IN SUS APOI IN JOS
 IN JOS APOI IN SUS

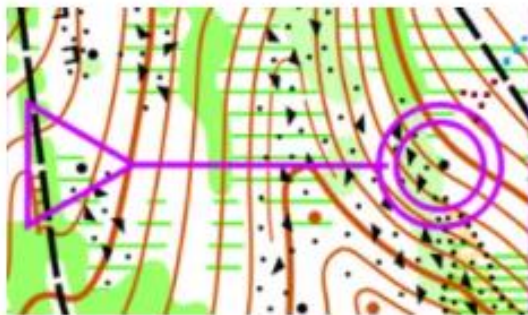


HARTA NR. 7

CUM SE MERGE PE TEREN INTRE START SI SOSIRE, PE HARTA NR. 7 ? *

- IN SUS
 IN JOS
 IN SUS APOI IN JOS
 IN JOS APOI IN SUS

INTERPRETAREA CURBELOR DE NIVEL



HARTA NR. 8

CUM SE MERGE PE TEREN INTRE START SI SOSIRE, PE HARTA NR. 8 ? *

- IN SUS
 IN JOS
 IN SUS APOI IN JOS
 IN JOS APOI IN SUS

INTERPRETAREA CURBELOR DE NIVEL



HARTA NR. 9

CUM SE MERGE PE TEREN INTRE START SI SOSIRE, PE HARTA NR. 9 ? *

- IN SUS
 IN JOS
 IN SUS APOI IN JOS
 IN JOS APOI IN SUS

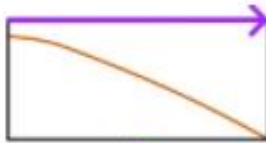
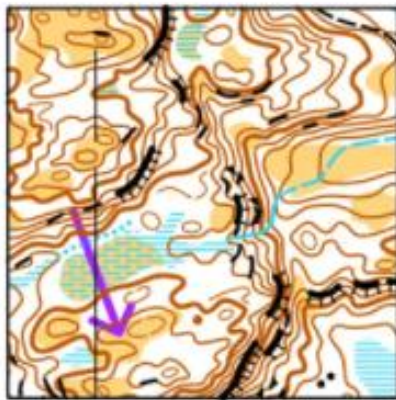


HARTA NR. 10

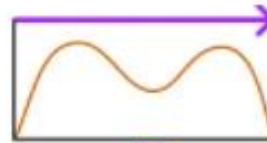
CUM SE MERGE PE TEREN INTRE START SI SOSIRE, PE HARTA NR. 10 ? *

- IN SUS
 IN JOS
 IN SUS APOI IN JOS
 IN JOS APOI IN SUS

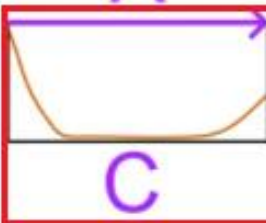
PROFILUL CURBELOR DE NIVEL PE O SECTIUNE DIN TRASEU DE ORIENTARE



A



B



C



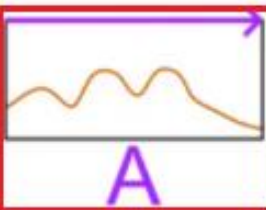
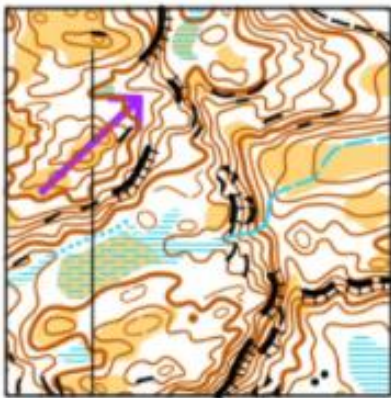
D

PUZZLE NR.1 HARTA + 4 PROFILE

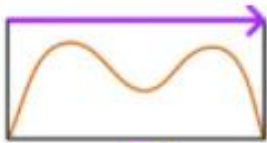
CE LITERA (A,B,C SAU D) ARE PROFILUL CARE SE POTRIVESTE CU DIRECTIA SAGETII DE PE FRAGMENTUL DE HARTA, DIN PUZZLE NR.1 ? *

- PROFILUL A
 PROFILUL B
 PROFILUL C
 PROFILUL D

PROFILUL CURBELOR DE NIVEL PE O SECTIUNE DIN TRASEU DE ORIENTARE




A



B



C

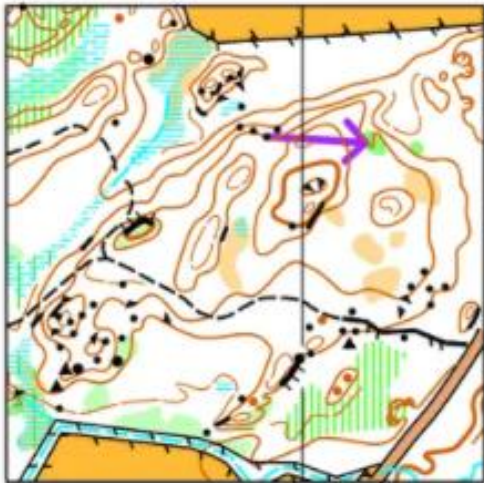


D

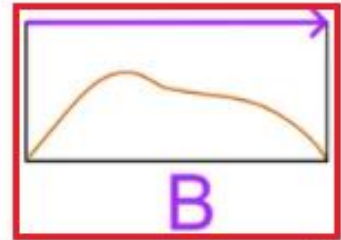
PUZZLE NR. 2 HARTA + 4 PROFILE

CE LITERA (A,B,C SAU D) ARE PROFILUL CARE SE POTRIVESTE CU DIRECTIA SAGETII DE PE FRAGMENTUL DE HARTA, DIN PUZZLE NR. 2 ? *


- PROFILUL A
 PROFILUL B
 PROFILUL C
 PROFILUL D




A



B



C



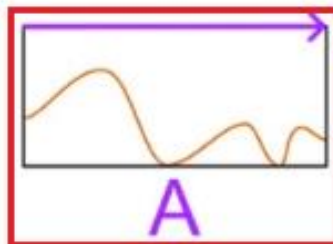
D

PUZZLE NR. 3 HARTA + 4 PROFILURI

CE LITERA (A,B,C SAU D) ARE PROFILUL CARE SE POTRIVESTE CU DIRECTIA SAGETII DE PE FRAGMENTUL DE HARTA, DIN PUZZLE NR. 3 ? *

- PROFILUL A
 PROFILUL B
 PROFILUL C
 PROFILUL D


PROFILUL CURBELOR DE NIVEL PE O SECTIUNE DIN TRASEU DE ORIENTARE




A



B



C



D


PUZZLE NR. 4 HARTA + 4 PROFILE

CE LITERA (A,B,C SAU D) ARE PROFILUL CARE SE POTRIVESTE CU DIRECTIA SAGETII DE PE FRAGMENTUL DE HARTA, DIN PUZZLE NR. 4 ? *

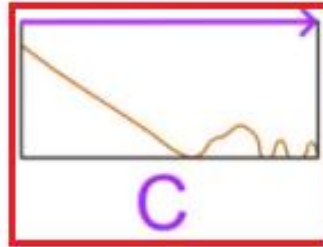
- PROFILUL A
 PROFILUL B
 PROFILUL C
 PROFILUL D



A



B



C



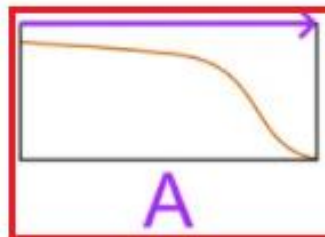
D

PUZZLE NR. 5 HARTA + 4 PROFILE

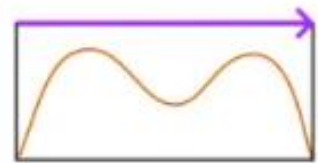
CE LITERA (A,B,C SAU D) ARE PROFILUL CARE SE POTRIVESTE CU DIRECTIA SAGETII DE PE FRAGMENTUL DE HARTA, DIN PUZZLE NR. 5 ? *

- PROFILULA
 PROFILUL B
 PROFILUL C
 PROFILUL D


PROFILUL CURBELOR DE NIVEL PE O SECTIUNE DIN TRASEU DE ORIENTARE



A



B



C




D

PUZZLE NR. 6 HARTA + 4 PROFILE

CE LITERA (A,B,C SAU D) ARE PROFILUL CARE SE POTRIVESTE CU DIRECTIA SAGETII DE PE FRAGMENTUL DE HARTA, DIN PUZZLE NR. 6 ? *


- PROFILULA
 PROFILUL B
 PROFILUL C
 PROFILUL D




A



B



C



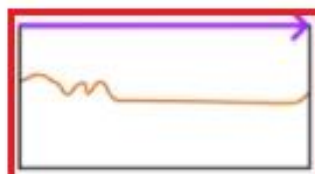
D

PUZZLE NR. 7 HARTA + 4 PROFILE


CE LITERA (A,B,C SAU D) ARE PROFILUL CARE SE POTRIVESTE CU DIRECTIA SAGETII DE PE FRAGMENTUL DE HARTA, DIN PUZZLE NR. 7 ? *

- PROFILULA
 PROFILUL B
 PROFILUL C
 PROFILUL D


PROFILUL CURBELOR DE NIVEL PE O SECTIUNE DIN TRASEU DE ORIENTARE



A



B



C



D

PUZZLE NR. 8 HARTA + 4 PROFILE

CE LITERA (A,B,C SAU D) ARE PROFILUL CARE SE POTRIVESTE CU DIRECTIA SAGETII DE PE FRAGMENTUL DE HARTA, DIN PUZZLE NR. 8 ? *

- PROFILULA
 PROFILUL B
 PROFILUL C
 PROFILUL D